

# Physical Optics

**OPTICS** :- It is the branch of Physics which deals with the study of production, propagation and properties of light.

**LIGHT** :- Light is a type of energy which produces sensation of vision.

## WAVE THEORY OF LIGHT

In about 1690, Huygen's, a Dutch scientist, proposed that light energy from a luminous source travels in space by means of wave motion. The experimental results in support of wave theory in Huygen's time was not convincing. Because in those days many scientists believed on the Newton's corpuscular theory of light. However, in 1801, Young discovered a wave characteristic, the interference of light which supported the Huygen's wave theory.

## 9.1 WAVEFRONTS

1- **Definition** :- Such a surface on which all the points have the same phase of vibration is known as wavefront.

2- **Explanation** :-

(a) - Consider a point source of light at 'S'. Waves emitted from this source will propagate outwards in all directions with speed  $c$ . After time ' $t$ ', they will reach the surface of a sphere with centre as  $S$  and radius as  $ct$ . ( $\because s = vt$ ). Every point on the surface of this sphere will be set into vibration by the waves reaching there. As the distance of all these points from the source is the same, so their state of vibration will be

identical. In other words we can say that all the points on the surface of the sphere will have the same phase.

**(b) - Types :-**

There are two types of the wavefronts.

**(i) - Spherical Wavefront :-**

In case of point source of light in a homogeneous medium, the wavefronts will be concentric spheres with centre at source.

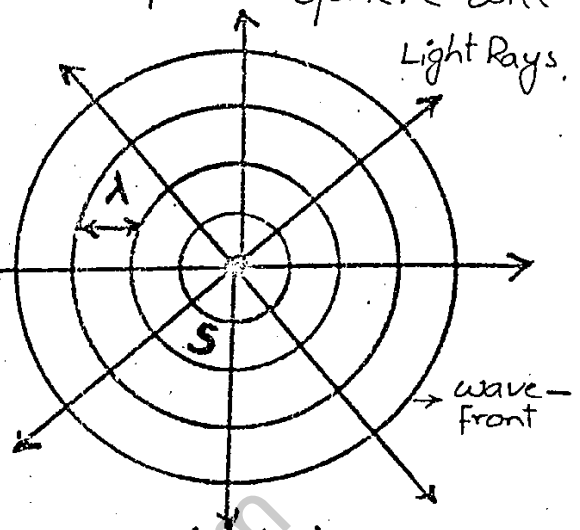


Fig. (a)

Such wavefronts are known as spherical wavefronts, as shown in figure (a).

**(ii) - Plane Wavefront :-**

At very large distance from the source, a small portion of spherical wavefront becomes nearly a plane. This type of wavefront is called as plane wavefront as shown in figure (b).

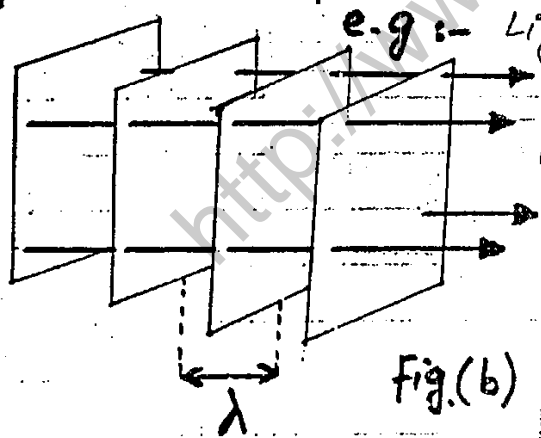


Fig. (b)

e.g :- Light from the sun reaches the earth in plane

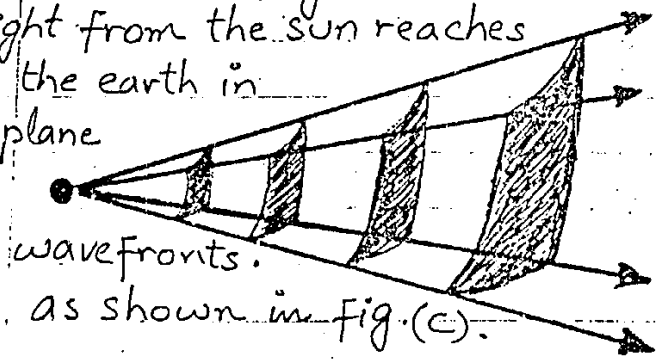


Fig. (c)

→ The wave propagates in space by the motion of the wavefronts. The distance between the consecutive wavefront is one wave length.

**(c) - Ray of Light :-** A line normal to the wavefront including the direction of motion is called a ray of light.

**(d) - Plane Wave**

Small segments of large spherical wavefronts

approximate a plane wave.

In the study of interference and diffraction, plane waves and plane wavefronts are considered.

A usual way to obtain a plane wave is to place point source of light at the focus of a convex lens.

The rays coming out of the lens will constitute plane waves.




Fig. (d).

## 9.2 HUYGEN'S PRINCIPLE

1- Introduction :- Knowing the shape and location of a wavefront at any time instant 't', Huygen's principle enables us to determine the shape and location of the new wavefront at a later time 't + Δt'.

2- Statement :- This principle consists of two parts:

(a) - Every point of a wavefront may be considered as a source of secondary wavelets which spread out in forward direction with a speed equal to the speed of propagation of the wave.

(b) - The new position of the wavefront after a certain interval of time can be found by constructing a surface that touches all the secondary wavelets.

3- Explanation :-

Consider a point source 'S'. AB represents the wavefront at any instant 't'. To determine the wavefront at time  $t + \Delta t$ , draw secondary wavelets with centre at various points on the wavefront AB and radius as 'cΔt' ( $s = vt$ ) where 'c' is the speed of the propagation of

of the wave as shown in fig (a). The location of new wavefront at time  $t + \Delta t$  is  $A'B$  which is a tangent envelope to all the secondary wavelets.

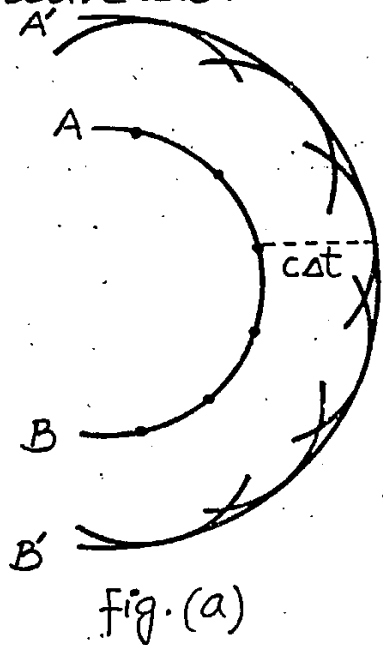


Fig. (a)

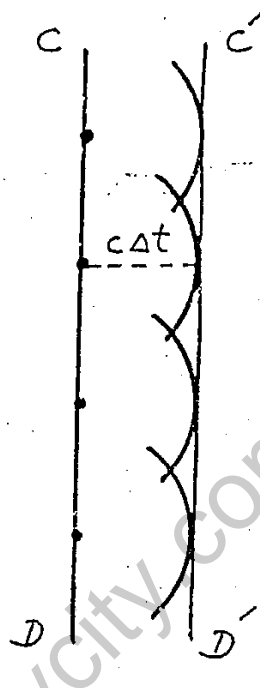


Figure (b) shows a similar construction for a plane wavefront.

In the fig(a) and fig(b)  $A'B'$  and  $C'D'$  are the new positions of wavefronts.

### 9.3 INTERFERENCE OF LIGHT WAVES

#### 1- Introduction:-

An oil film floating on water surface exhibits beautiful colour patterns. This happens due to interference of light waves.

As we know that when two waves travel in the same medium, they would interfere constructively or destructively. The amplitude of the resultant wave will be greater than either of the individual wave, if they interfere constructively. In the case of destructive interference, the amplitude of the resultant wave will be less than that of either of the individual waves.

#### 2. Conditions for Detectable Interference

In order to observe the interference of light waves the following conditions must be applied.

- (a) The interfering beams must be monochromatic, that is, of a single wavelength.
- (b) The interfering beams of light must be coherent.
- (c) The principle of linear superposition should be applicable.

### 3. Explanation :-

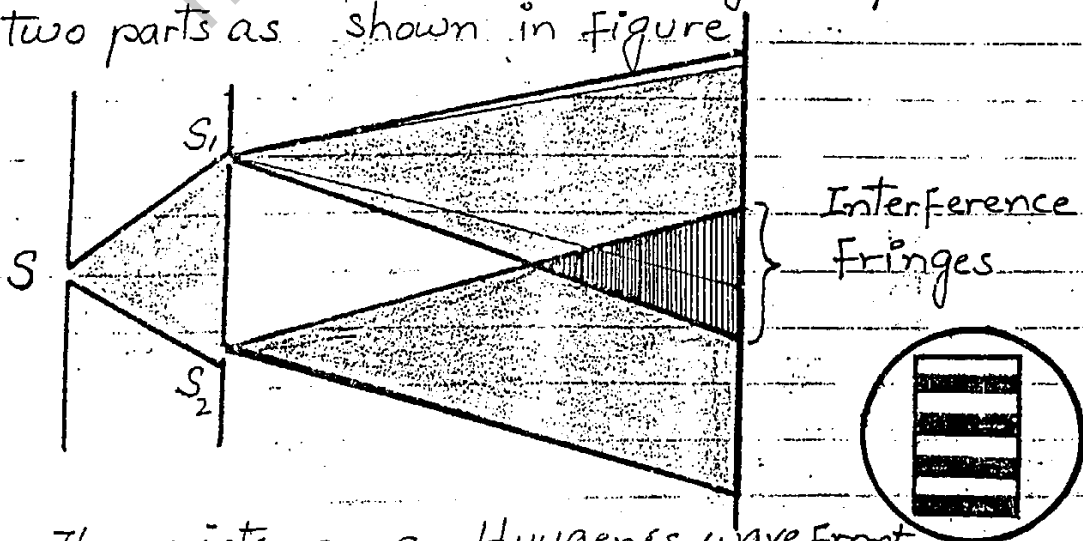
(a). Consider two or more sources of light waves of the same wavelength. If the sources send out crests or troughs at the same instant, the individual waves maintain a constant phase difference with one another. Such waves will interfere constructively or destructively.

#### (b). Coherent Sources

(i) Def:- The monochromatic sources of light which emit waves, having a constant phase difference, are called Coherent Sources.

#### (ii). Method to produce Coherent Sources

A common method of producing two coherent light beams is to use a monochromatic source to illuminate a screen containing two small holes, usually in the shape of slits. The light emerging from the two slits is coherent because a single source produces the original beam and the two slits serve only to split it into two parts as shown in figure.



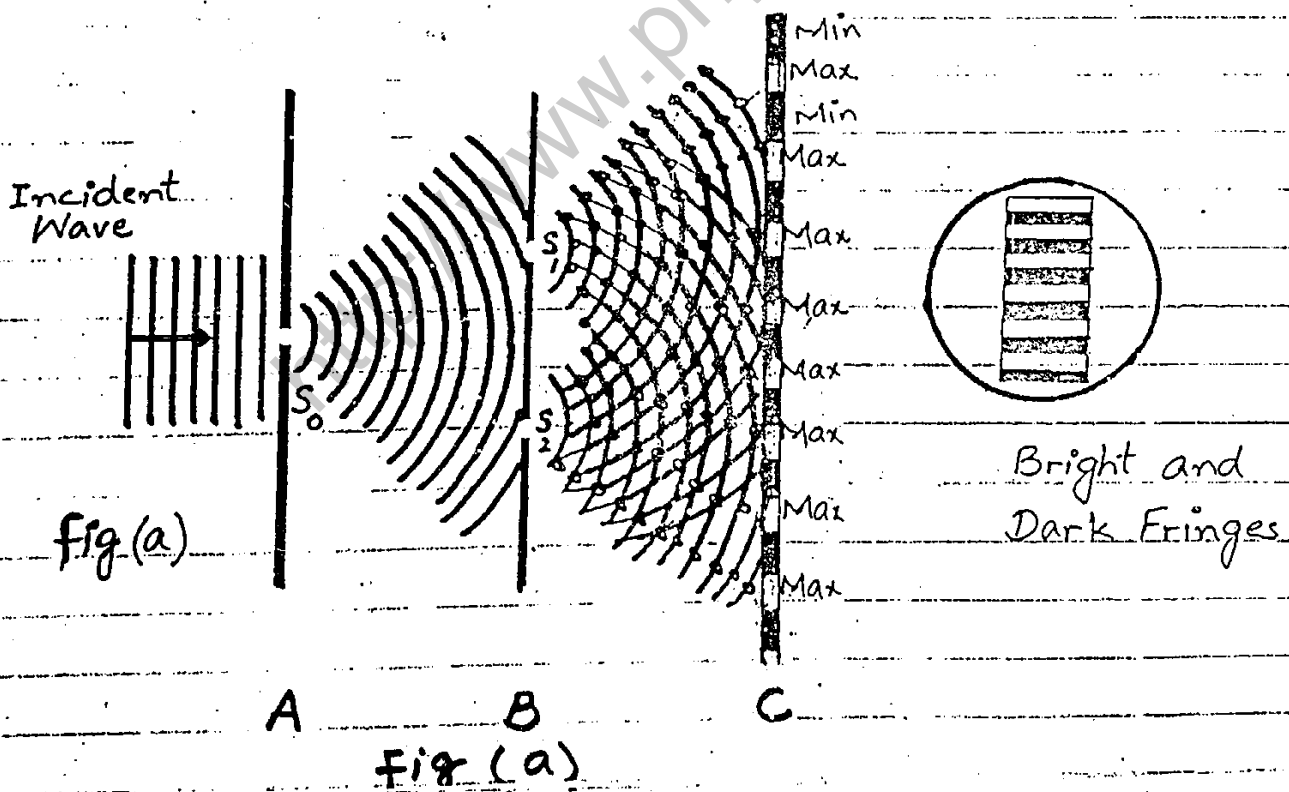
→ The points on a Huygen's wavefront which send out secondary wavelets are also coherent sources of light.

## 9.4 YOUNG'S DOUBLE SLIT EXPERIMENT

1- Introduction:- In 1801, Thomas Young a British Physicist performed an experiment to study the interference effect of light, which supported the Huygen's wave theory.

2. Experimental arrangement:-

A screen having two narrow slits is illuminated by a beam of monochromatic light. The portions of the wavefronts incident on the slits behave as sources of secondary wavelets (Huygen's principle). The secondary wavelets leaving the slits are coherent. Superposition of these wavelets result in a series of bright and dark bands (fringes) which are observed on a second screen placed at some distance parallel to the first screen.



### 3. FORMATION OF BRIGHT AND DARK BANDS

Let us consider the formation of bright and dark bands (fringes). As we know the two slits behave as coherent sources of secondary wavelets.

The wavelets arrive at the screen in such a way<sup>7</sup> that at some points crests fall on crests and troughs on troughs resulting in constructive interference and bright fringes are formed. There are some points on the screen where crests meet troughs giving rise to destructive interference and dark fringes are formed.

Maxima :- The bright fringes are termed as maxima.

Minima :- The dark fringes are termed as minima.

#### 4. Equations for Maxima and Minima

Take an arbitrary point 'P' on the screen on one side of the central point 'O' as shown in figure (b). AP and BP are the paths of the rays reaching P. The line AD is drawn such that  $AP = DP$ . Let the separation between the centres of two slits  $S_1$  and  $S_2$  be  $AB = d$ . The distance of second screen from the slits is  $CO = L$ . The angle between CP and CO is  $\theta$ . Therefore

$$\angle BAD = \theta \quad (\text{Angle b/w two lines will be the angle b/w their normals})$$

The path difference between wavelets leaving the slits and arriving at 'P' is BD.

$$\text{i.e. Path Diff.} = BD = BP - AP$$

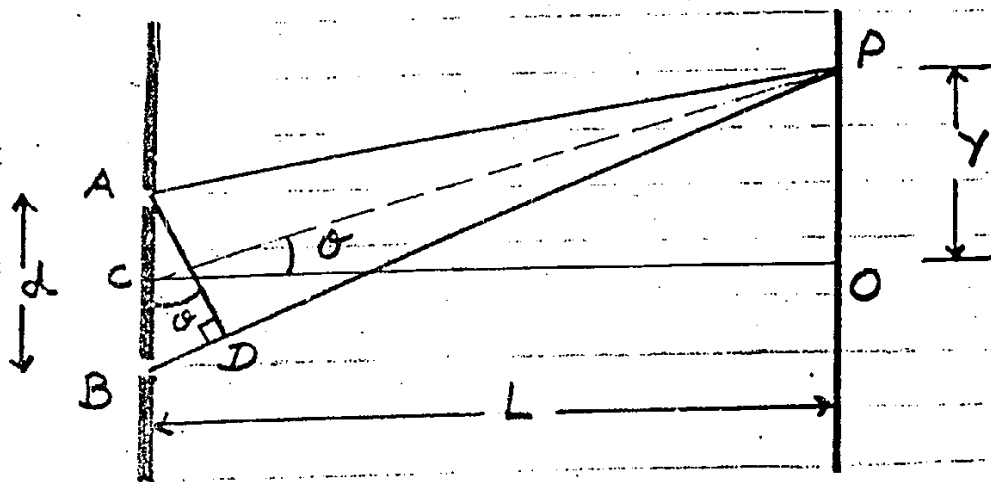


Fig. (b)


**FOR MAXIMA :-** If point P is to have bright fringe the path difference must be an integral multiple of wavelength.

i.e P. diff =  $BD = m\lambda$  where  $m = 0, 1, 2, \dots$

From geometry of rt  $\triangle ABD$   
 $BD = d \sin \theta$

So

$d \sin \theta = m\lambda$  ————— ①



It is observed that each bright fringe on one side of O has symmetrically located bright fringe on the other side of O. The central bright fringe is obtained when  $m = 0$ .

**FOR MINIMA :-** If point P is to have dark fringe the path difference must contain odd integral multiple of half of the wavelength.

i.e P. diff. =  $BD = (m + \frac{1}{2})\lambda$  where  $m = 0, 1, 2, \dots$

So

$d \sin \theta = (m + \frac{1}{2})\lambda$  ————— ②

In this case, the first dark fringe will appear for  $m = 0$  and second dark fringe  $m = 1$ . The interference pattern obtained in the Young's experiment is shown in fig (c).

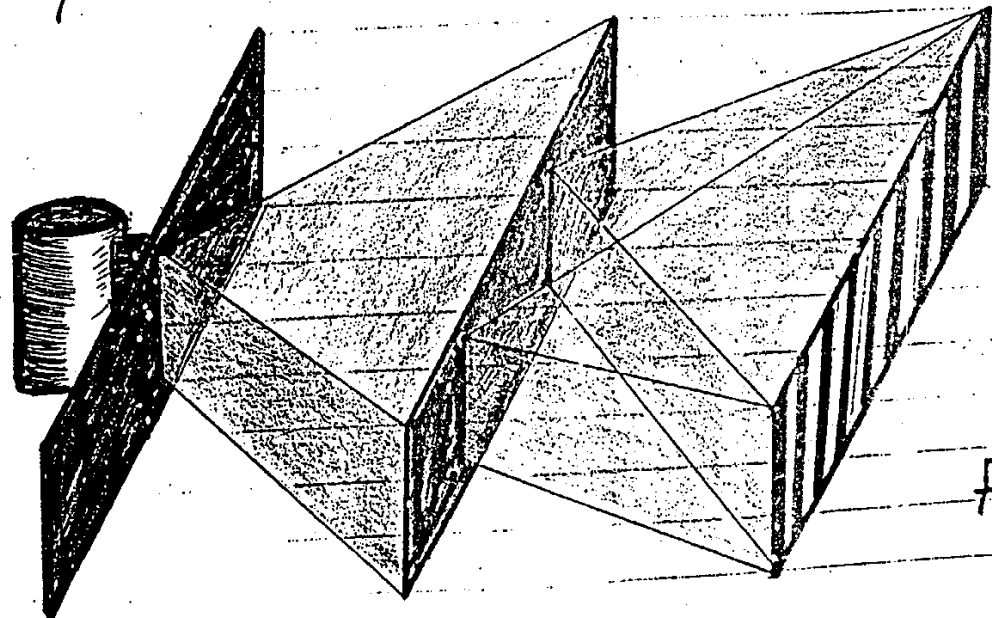


fig (c)



## (a) POSITION OF BRIGHT FRINGE

From equation (1)

9

If  $\theta$  is very small, then  
 $\sin \theta \approx \tan \theta$

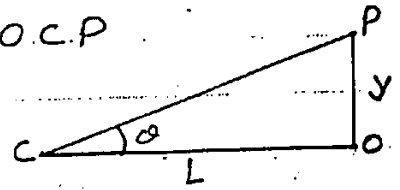
$$\text{So } d \tan \theta = m \lambda$$

As from fig (b) in rt  $\triangle OCP$

$$\tan \theta = \frac{OP}{OL} = \frac{y}{L}$$

Above equation becomes

$$\frac{d y}{L} = m \lambda$$



$$y = \frac{m \lambda L}{d} \quad (3)$$

## (b) POSITION OF DARK FRINGE

If P is to have dark fringe then  
from eq (2)

$$d \tan \theta = (m + \frac{1}{2}) \lambda$$

Again

$$\tan \theta = \frac{y}{L}$$

$$\therefore \frac{d y}{L} = (m + \frac{1}{2}) \lambda$$

So

$$y = (m + \frac{1}{2}) \frac{\lambda L}{d} \quad (4)$$

## 6. FRINGE WIDTH OR FRINGE SPACING

(a) Def:-

The distance between two adjacent bright fringes or two adjacent dark fringes is called Fringe Width or Fringe Spacing.



(b) Bright Fringe Width:-

In order to determine the distance between two adjacent bright fringes on the screen  $m$ th and  $(m+1)$ th fringes are considered.

$$\text{Position of } m \text{th bright fringe } y_m = \frac{m \lambda L}{d}$$

$$\text{" " } (m+1) \text{th " " } y_{m+1} = \frac{(m+1) \lambda L}{d}$$

Please visit us at

<http://www.phycity.com>

If the distance between the adjacent bright fringe (fringe width) is  $\Delta y$  then

10

$$\Delta y = y_{m+1} - y_m$$
$$= (m+1) \frac{\lambda L}{d} - m \frac{\lambda L}{d}$$

$$\Delta y = \frac{\lambda L}{d} \quad \text{--- (5)}$$

(ii) Dark Fringe Width:-

Position of  $m$ th dark fringe  $y_m = (m+1) \frac{\lambda L}{d}$

" "  $(m+1)$ th " "  $y_{m+1} = (m+2) \frac{\lambda L}{d}$

So

$$\Delta y = y_{m+1} - y_m$$
$$= (m+2) \frac{\lambda L}{d} - (m+1) \frac{\lambda L}{d}$$

$$\Delta y = \frac{\lambda L}{d}$$

(iii) FACTORS:-

This shows that the bright and dark fringes are of equal width and are equally spaced.

Equation (5) shows that fringe spacing increases if red light (long wavelength) is used as compared to blue light (short wavelength). (i.e.  $\propto \lambda$ )

The fringe spacing varies directly with distance  $L$  between the slits and screen.

It varies inversely with the separation  $d$  of the slits.

→ Monochromatic Light:-

Sodium Chloride in a flame gives out pure yellow light. This light is not a mixture of red and green colours.

**EXAMPLE 9.1:** The distance between the slits in

Young's double slit experiment is 0.25 cm. Interference fringes are formed on a screen placed at a distance of 100 cm from the slits. The distance of the third dark fringe from the central bright fringe is 0.059 cm. Find the wavelength of the incident light.

**SOLUTION:-**  $d = 0.25 \text{ cm} = 2.5 \times 10^{-3} \text{ m}$   
 $y = 0.059 \text{ cm} = 5.9 \times 10^{-4} \text{ m}$   
 $L = 100 \text{ cm} = 1 \text{ m}$  and  $\lambda = ?$

For the 3<sup>rd</sup> dark fringe  $m = 2$

Using

$$y = \left(m + \frac{1}{2}\right) \frac{\lambda L}{d}$$

$$\lambda = \frac{y d}{\left(m + \frac{1}{2}\right) L} = \frac{5.9 \times 10^{-4} \text{ m} \times 2.5 \times 10^{-3} \text{ m}}{\left(2 + \frac{1}{2}\right) \times 1 \text{ m}}$$

$$\lambda = 5.19 \times 10^{-7} \text{ m}$$

$\therefore$

or

$$\lambda = 519 \text{ nm}$$

**EXAMPLE 9.2:** Yellow sodium light of wavelength 589 nm, emitted by a single source passes through two narrow slits 1 mm apart. The interference pattern is observed on a screen 225 cm away. How far apart are two adjacent bright fringes?

**SOLUTION:-**  $\lambda = 589 \text{ nm} = 589 \times 10^{-9} \text{ m}$

$$d = 1 \text{ mm} = 10^{-3} \text{ m}$$

$$L = 225 \text{ cm} = 2.25 \text{ m}$$

$$\Delta y = ?$$

Using

$$\Delta y = \frac{\lambda L}{d}$$

$$= \frac{589 \times 10^{-9} \text{ m} \times 2.25 \text{ m}}{10^{-3} \text{ m}}$$

$$\Delta y = 1.33 \times 10^{-3} \text{ m}$$

$$\Delta y = 1.33 \text{ mm}$$

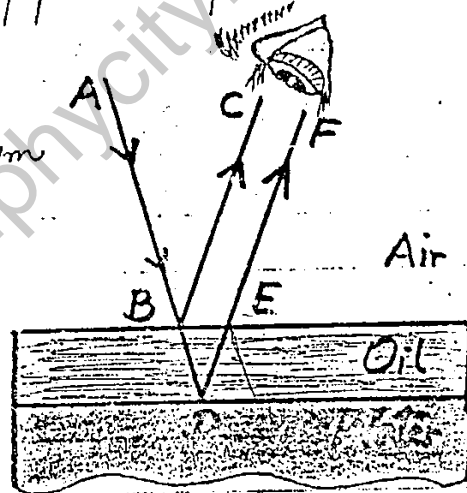
## 9.5 INTERFERENCE IN THIN FILM

1. THIN FILM:- A thin film is a transparent medium whose thickness is comparable with the wavelength of light.
2. EXAMPLES:- Soap bubbles and oil film on the surface of water.
3. EXPLANATION:- Brilliant and beautiful colours in soap bubbles and oil film on the surface of water are due to interference of light reflected from the two surfaces of the film.

### (a). Film Of Regular Thickness

Consider a thin film of a refracting medium. A beam 'AB' of monochromatic light of wavelength  $\lambda$  is incident on its upper surface.

It is partly reflected along BC and partly refracted into the medium along BD. At 'D' it is again partly reflected inside the medium at E and then along EF as shown in figure.



The beam BC and EF being the parts of the same beam has a phase coherence. As the film is thin so, the separation between the beams BC and EF will be very small, and they will superpose and the result of their interference will be detected by the eye. It can be seen from figure that the original beam splits into two parts at point B (BC and BD) and they enter the eye after covering different lengths of paths.

Their path difference depends upon

- (i) Thickness and nature of the film
- (ii) Angle of incidence.

If the two reflected waves BC and EF reinforce each other, then the film as seen with the help of a parallel beam of monochromatic light will look bright. However, if the thickness of the film and angle of incidence are such that the two reflected waves cancel each other, the film looks dark.

### (b). Film Of Irregular Thickness

If white light is incident on a film of irregular thickness at all possible angles, we should consider the interference pattern due to each spectral colour separately. It is quite possible that at a certain place on the film, its thickness and the angle of incidence of light are such that the condition of destructive interference of one colour is being satisfied. Hence, that portion of the film will exhibit the remaining constituent colour of the white light.

e.g. :- (i) Interference pattern produced by a thin soap film illuminated by white light.

(ii) - The vivid iridescence of peacock feathers is due to interference of the light reflected from its complex layered surface.

## 9.6 NEWTON'S RINGS

1. Introduction :- Newton performed an experiment to observe the interference pattern of monochromatic light, due to which dark and bright rings are produced known as Newton's Rings.

2. Experimental Arrangement :- The apparatus consists of a plano convex lens of long focal length is placed in contact on

plane glass plate, a thin air film is enclosed between the upper surface of the glass plate and the lower surface of the lens. The thickness of the air film is almost zero at the point of contact  $O$  and gradually increases as one proceeds towards the periphery of the lens. Thus, points where the thickness of air film is constant, will lie on a circle with  $O$  as centre.

By means of a double convex lens a parallel beam of monochromatic light is produced. This parallel beam is reflected towards the lens  $L$  by using a glass slab  $G$ . The Newton's rings are observed by microscope  $M$ .

**3. Working:-**

(a) Consider a ray of monochromatic light that strikes the upper surface of the air film nearly along normal. The ray is partly reflected and partly refracted as shown in figure.

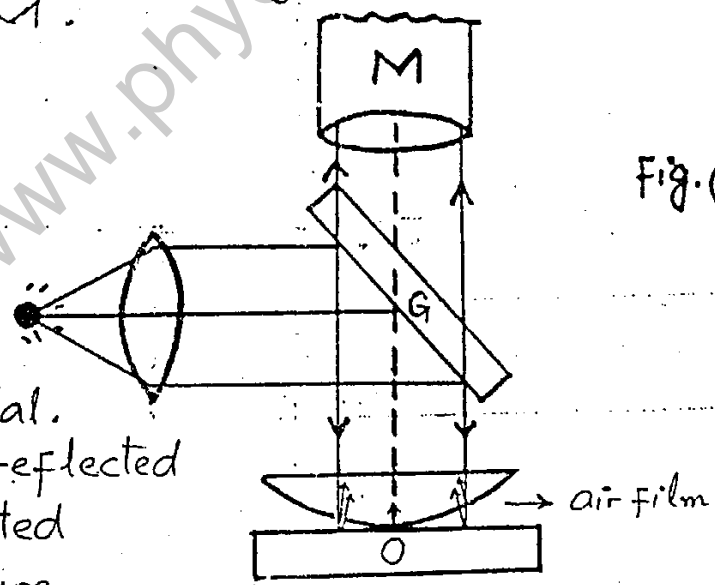


Fig. (a)

The ray refracted in the air film is also reflected partly at the lower surface of the film as shown in figure. The two reflected rays i.e. produced at the upper and lower surfaces of the film are coherent and interfere constructively or destructively. When the light reflected upwards is observed through a microscope  $M$  which is focussed on the glass plate, series of

dark and bright rings are seen with centre as O. These concentric rings are known as Newton's rings.



### (b). Central Spot :-

At the point of contact of the lens and the glass plate, the thickness of the film is effectively zero but due to reflection at the lower surface of air film from denser medium, an additional path difference of  $\lambda/2$  and phase difference of  $180^\circ$  is introduced. Consequently, the centre of Newton's rings is dark due to destructive interference.

## 9.7 MICHELSON'S INTERFEROMETER

1. Introduction :- This instrument was invented by an American Physicist Albert A. Michelson in 1881 using the idea of interference of light rays.

2. Definition :- It is an instrument which is used for the accurate measurement of wavelength and precise length measurements.

3. Principle :- Its working principle is based on interference. When a light beam falls upon it, it splits the light beam into two parts and then recombine them to produce an interference pattern after they have travelled over different paths.

### 4. Construction and Working :-

The essential features of a Michelson's interferometer are shown schematically in figure (a).

Monochromatic light from an external source falls on a half silvered glass plate  $G_1$  that partially reflects it and partially transmits it.

The reflected portion labeled as I in the fig(a) (16) travels a distance  $L_1$  to mirror  $M_1$ , which reflects the beam back towards  $G_1$ . The half silvered plate  $G_1$  partially transmits this portion that finally arrives at the observer's eye.

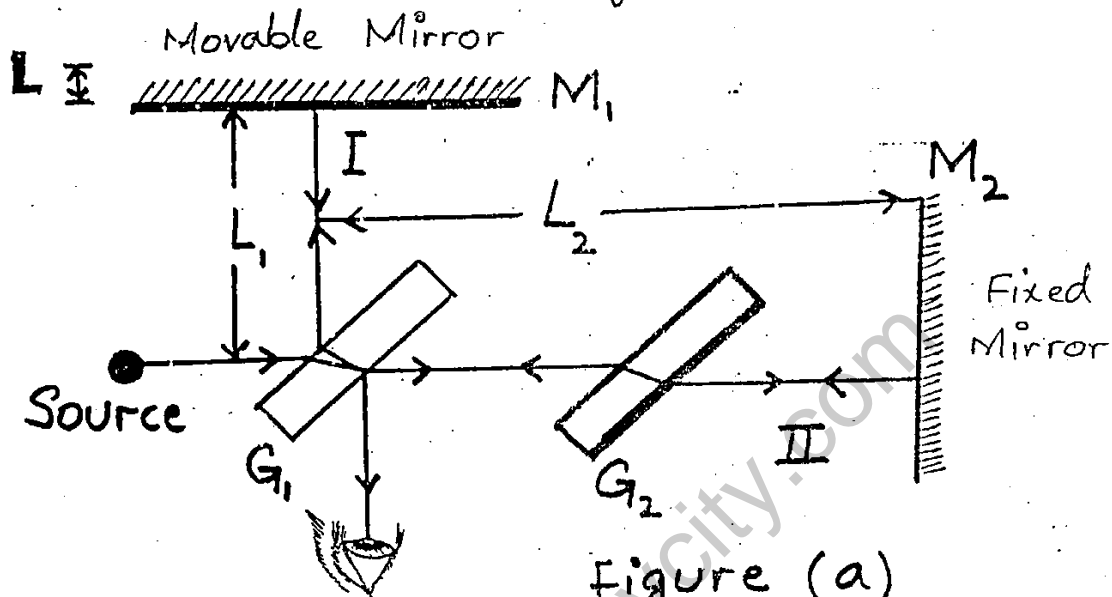
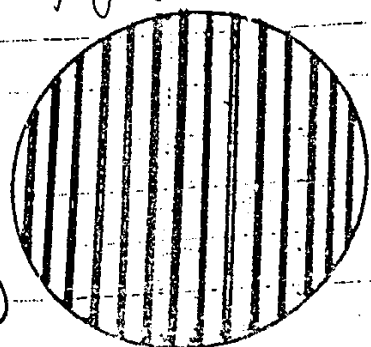


Figure (a)

The transmitted portion of the original beam labelled as II travels a distance  $L_2$  to mirror  $M_2$  which reflects the beam back towards  $G_1$ . The beam II partially reflected by  $G_1$  also arrives the observer's eye finally. The plate  $G_2$ , cut from the same piece of glass as  $G_1$  is introduced in the path of beam II as a compensator plate  $G_2$ , therefore equalizes the path length of the beam I and II. The two beams having their different paths are coherent. When they arrive at observer's eye, therefore produce interference effects. The observer then sees a series of parallel interference fringes as shown in Fig (b).

**5. THEORY:-**

In a practical interferometer mirror  $M_1$  can be moved along direction perpendicular to its surface by means of a precision screw.



Fig(b)



As length  $L$  is changed, the pattern of interference fringes is observed to shift.

If  $M_1$  is displaced through a distance equal to  $\lambda/2$ , a path difference of double of this displacement is produced i.e. equal to  $\lambda$ .

Thus a fringe is seen shifted forward across the line of reference of cross wire in the eye piece of the telescope used to view fringes.

A fringe is shifted, each time the mirror is displaced through  $\lambda/2$ . Hence, by counting the number 'm' of the fringes which are shifted by the displacement  $L$  of the mirror, we can write the equation

$$L = m \lambda/2$$

### 6. Uses:-

(a) - Very precise length measurements can be made with an interferometer. The motion of mirror  $M_1$  by only  $\lambda/4$  produces a clear difference between brightness and darkness.

( $\lambda/4 + \lambda/4 = \lambda/2$ ). For  $\lambda = 400 \text{ nm}$ , this means a high precision of  $100 \text{ nm}$  or  $10^{-4} \text{ mm}$ .

(b) - Michelson measured the length of standard meter in terms of the wavelength of red cadmium light and showed that the standard meter was equivalent to  $1,553,163.5$  wavelengths of this light.

## 9.8 DIFFRACTION OF LIGHT

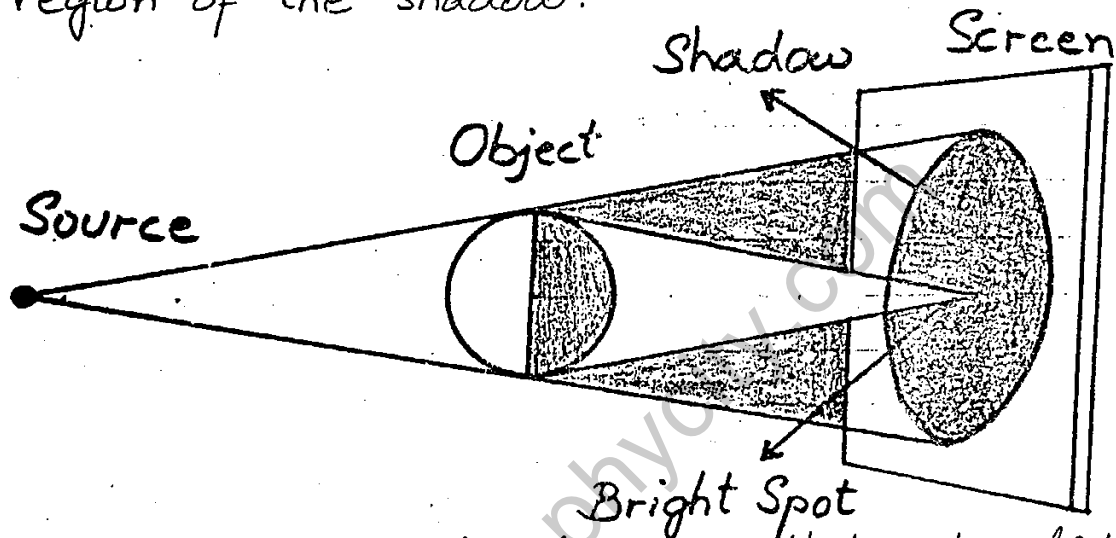
1. Definition :- The property of bending of light around obstacles and spreading of light waves into the geometrical shadow of an obstacle is called diffraction.

2. Explanation :- Consider a small and smooth steel ball of about  $3 \text{ mm}$  in diameter is

illuminated by a point source of light.

(18)

The shadow of the object is received on a screen as shown in figure. The figure shows that the shadow of spherical object is not completely dark but has a bright spot at its centre. According to Huygen's principle, each point on the rim of the sphere behaves as a source of secondary wavelets which illuminate the central region of the shadow.



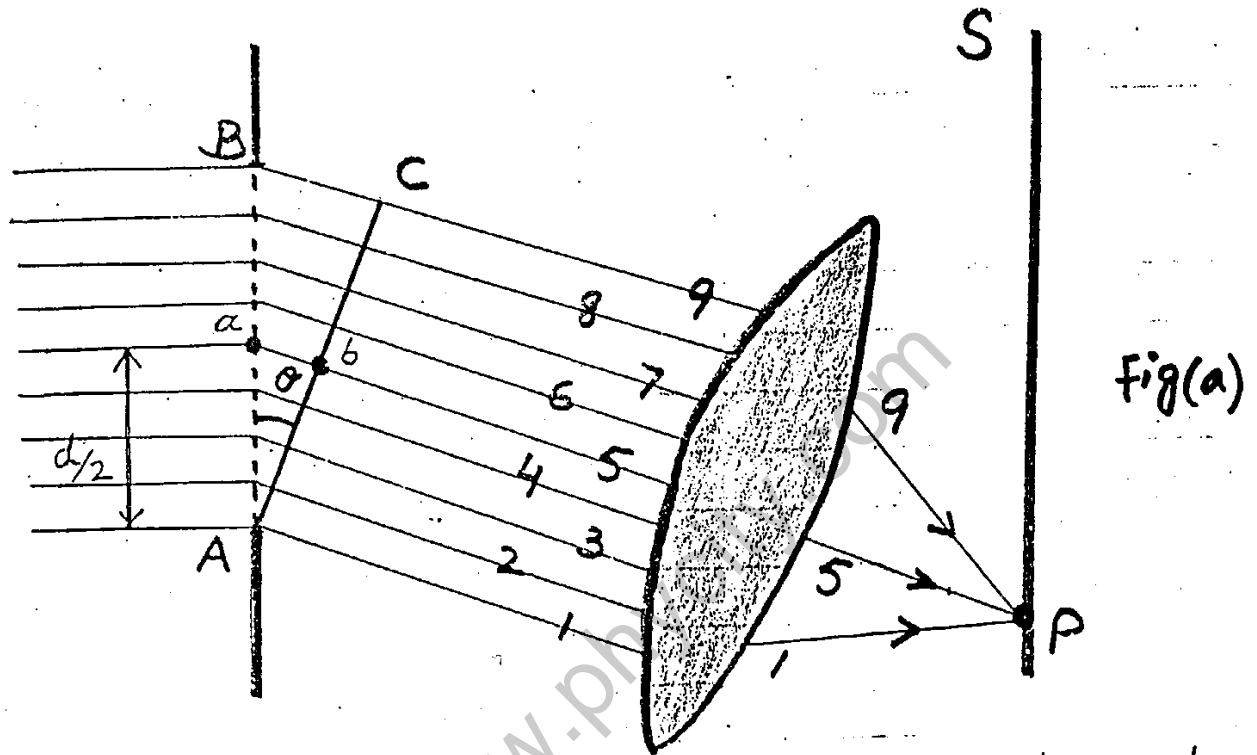
The experiment clearly shows that when light travels past an obstacle, it does not proceed exactly along a straight path, but bends around the obstacle.

3. Condition:- The phenomenon is found to be prominent when the wavelength of the light is large as compared with the size of the obstacle or aperture of the slit. The diffraction of the light occurs in effect, due to the interference between rays coming from different parts of the same wavefront.

## 9.9 DIFFRACTION DUE TO A NARROW SLIT

The experimental arrangement for studying diffraction of light due to a narrow slit is shown in the figure. The slit AB of width 'd' is illuminated

by a parallel beam of monochromatic light of wavelength  $\lambda$ . The screen  $S$  is placed parallel to the slit for observing the effects of the diffraction of light. A small portion of the incident wavefront passes through the narrow slit.



Each point of this section of the wavefront sends out secondary wavelets to the screen. These wavelets then interfere to produce the diffraction pattern. It becomes simple to deal with rays instead of wavefronts as shown in the figure. In this figure, only nine rays have been drawn whereas actually there are a large number of them. Let us consider waves 1 and 5 which are in phase when in the wavefront  $AB$ . After these reach the wavefront  $AC$ , wave 5 would have a path difference of  $ab$  say equal to  $\lambda/2$ . Thus when these two rays reach point  $P$  on the screen; they will interfere destructively. Similarly, each pair 2 and 6, 3 and 7, 4 and 8 differ in path by  $\lambda/2$  and will do the same.

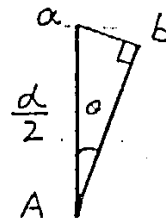
The path difference in 1 and 5 =  $a b$

(20)

From rt  $\triangle d \triangle A a b$

$$\sin \theta = \frac{ab}{aA} = \frac{ab}{d/2}$$

$$ab = \frac{d}{2} \sin \theta$$



The equation for first minimum is, then

$$\frac{d}{2} \sin \theta = \lambda/2 \quad \left( \text{Path Diff.} = \text{odd integral multiple of } \lambda/2 \right)$$

or  $d \sin \theta = \lambda$

In general, the conditions for different orders of minima on either side of centre are given as

$$d \sin \theta = m \lambda \quad \text{where } m = 1, 2, 3, \dots$$

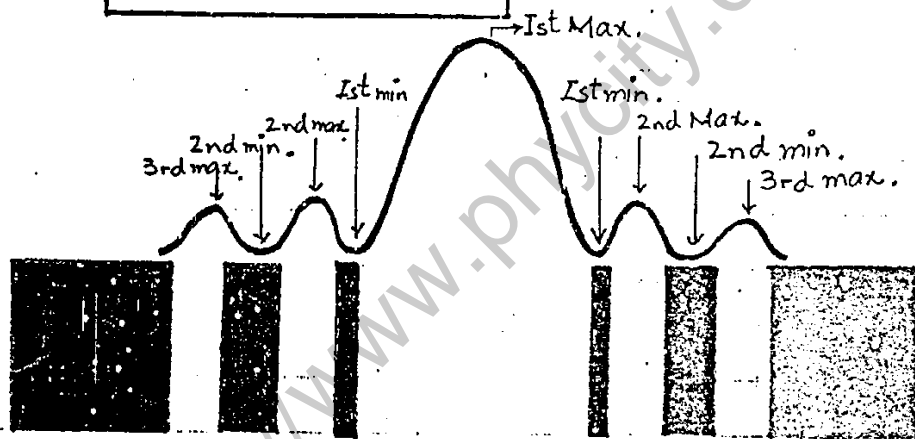


Fig. (b). Diffraction pattern of monochromatic light produced due to a single slit; graphical representation and photograph of the pattern.

The region between any two consecutive minima both above and below  $\theta$  (centre) will be bright. Therefore, a narrow slit produces a series of bright and dark regions with the first bright region at the centre of the pattern. Such a pattern is shown in above figure (b).

You can download more useful notes from

<http://www.phycity.com>

1. Definition:- A diffraction grating is a glass plate having a large number of close parallel equidistant slits mechanically ruled on it. The transparent spacing between the scratches on the glass plate act as slits. A typical diffraction grating has about 400 to 5000 lines per centimetre.

2. Grating Element:- The distance between two adjacent slits is called Grating Element. It is denoted by 'd'. Its value is obtained by dividing the length 'L' of the grating by the total number N of the lines ruled on it.

$$i - e \quad d = \frac{L}{N} = \frac{1}{N \text{ per metre}}$$

### 3 - Diffraction Through Grating:-

In order to understand how a grating diffracts light, consider a parallel beam of monochromatic light illuminating the grating at normal incidence as shown in figure (a). The sections of wavefront that pass through the slits behave as sources of secondary wavelets according to Huygen's principle.

### 4. Measurement Of Wavelength By Grating

Consider the parallel rays which after diffraction through the grating make an angle  $\theta$  with AB the normal to grating. They are then brought to focus on the screen at P by a convex lens.

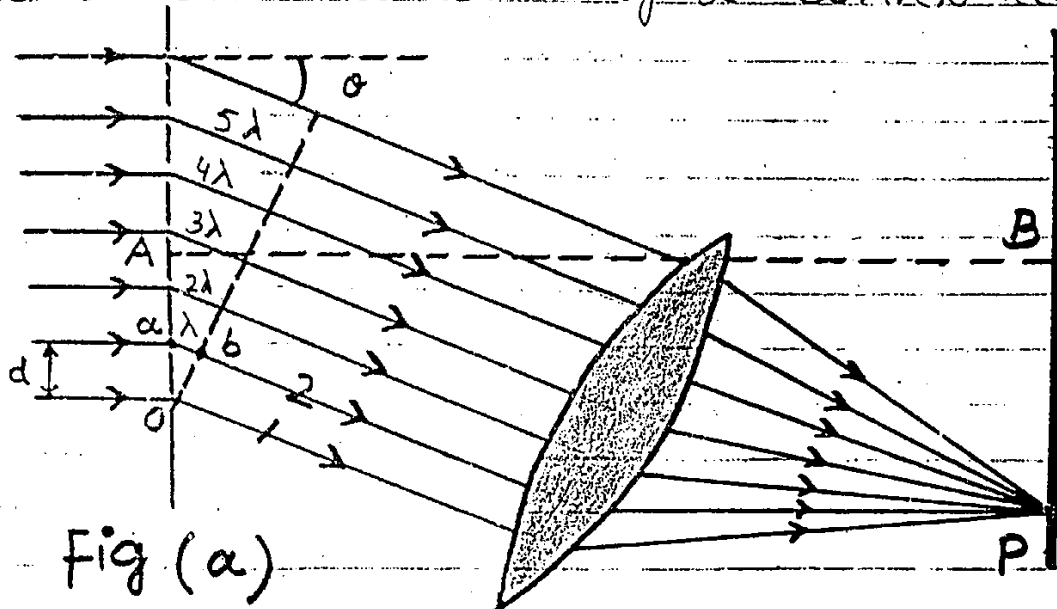


Fig (a)

Now consider rays 1 and 2.

From fig. (a), it is clear that the ray 1 covers a distance  $ab$  more than ray 2. If path diff  $ab$  is equal to ' $\lambda$ ' then they will reinforce each other at P. As incident

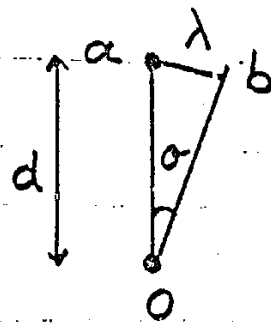


Fig (b)

beam is parallel, so the rays from any two consecutive slits will differ in path by  $\lambda$  when they arrive at P. They will therefore, interfere constructively. Hence condition for constructive interference is that  $ab$ , the path difference between two consecutive rays, should be equal to  $\lambda$  i.e.

$$ab = \lambda$$

From fig (b).  $ab = d \sin \theta$  ——— ①

$$\therefore d \sin \theta = \lambda$$
 ——— ②

According to eq ①, when  $\theta = 0$  i.e along the direction of normal to the grating, the path difference between the rays coming out from the slits of the grating will be zero. So we will get a bright image in this direction.

This is known as zero order image formed by the grating. If we increase ' $\theta$ ' on either side of this direction, a value of  $\theta$  will be arrived at which  $d \sin \theta$  will become ' $\lambda$ ' and according to eq ②, we will again get a bright image.

This is known as first order image of the grating. In this way if we continue increasing ' $\theta$ ' we will get the second, third, etc. image on either side of the zero order image according to  $d \sin \theta$  becomes equal to  $2\lambda, 3\lambda$  etc.

Thus the equation ② can be written in more general form as

$$d \sin \theta = n \lambda$$
 ——— ③

where  $n = 0, 1, 2, 3, \dots$  etc.

However, if the incident light contains different 23 wavelengths, the image of each wavelength for a certain value of  $n$  is diffracted in a different direction. Thus separate images are obtained corresponding to each wavelength or colour. Equation (3) shows that the value of  $\theta$  depends upon  $n$ , so the images of different colours are much separated in higher orders.

### ILLUMINATION OF DISC BY WHITE LIGHT

The fine rulings, each  $0.5 \mu\text{m}$  wide on a compact disc function as a diffraction grating. When a small source of white light illuminates a disc, the diffracted light forms 'coloured lanes' that are composite of the diffraction patterns from the rulings.

## 9.11 DIFFRACTION OF X-RAYS BY CRYSTALS

### 1. Introduction :-

X-rays is a type of electromagnetic waves of very short wavelength i.e. about  $10^{-10} \text{m}$ .

In 1914, W. H. Bragg and W. L. Bragg studied the atomic structure of crystals by using X-rays. They found that a monochromatic beam of X-rays was reflected from a crystal plane. The crystal plane acted like a mirror. In order to observe the effects of diffraction, the grating spacing must be of the order of the wavelength of radiation used. As the interatomic spacing of crystal is typically of the order of  $10^{-10} \text{m}$ , so X-rays are used for observing the effects of diffraction.

2. Bragg's Equation :- As the regular array of atoms in a crystal forms a natural

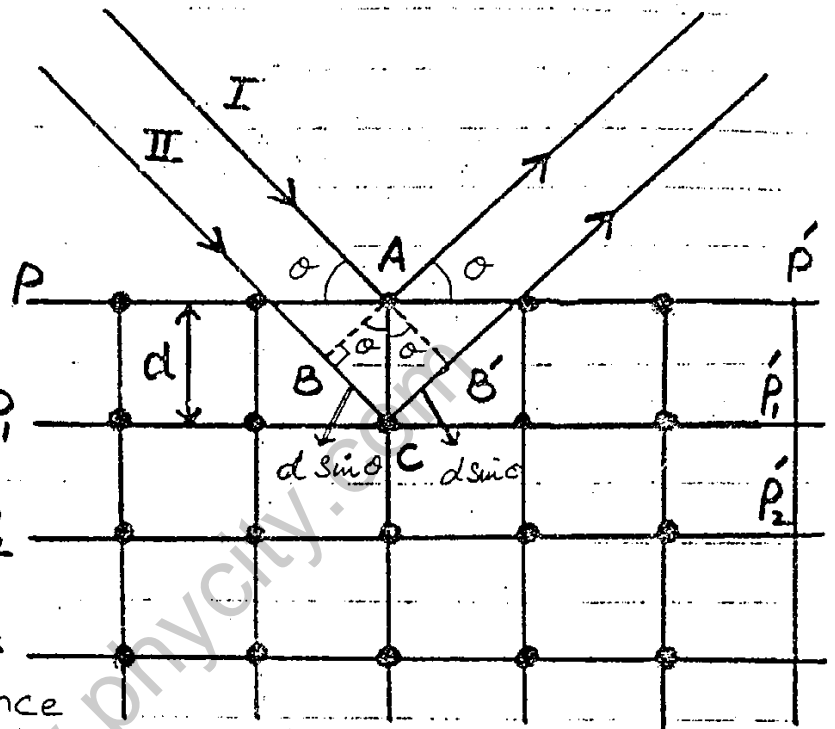
diffraction grating. To understand the

(24)

diffraction of x-rays by crystals, a series of atomic planes of constant inter planer spacing  $d$  parallel to a crystal face are shown by lines  $PP'$ ,  $P_1P_1'$ ,  $P_2P_2'$  and so on as shown in figure.

Suppose an x-rays beam is incident at an angle  $\theta$  on one of the planes.

The beam can be reflected from both the upper and lower planes of atoms. The beam  $P_2$  reflected from lower plane travels some extra distance



as compared to the beam reflected from the upper plane. (i.e. path diff. =  $BC + CB'$ )

From figure it can be seen that Effective path difference between the reflected beams =  $BC + CB'$

$$= d \sin \theta + d \sin \theta = 2d \sin \theta$$

Therefore, for reinforcement, the path difference should be an integral multiple of the wavelength  
Thus

$$2d \sin \theta = n\lambda$$

This equation is known as the Bragg equation  
The value of  $n$  is referred to as the order of reflection.

**3. - USES :-** (a) The above equation can be used to determine inter planer spacing between similar parallel planes of a crystal if x-rays of known wave-length are allowed to diffract from the crystal.



(b) - X-rays diffraction has been very 25 useful in determining the structure of biologically important molecules such as hemoglobin, which is an important constituent of blood, and double helix structure of DNA.

## DIFFERENCE BETWEEN INTERFERENCE AND DIFFRACTION

### Interference

1. Interference is the result of superposition of light coming from two different wavefronts originating from the same source.
2. The fringe spacing may or may not be of the same width.
3. All bright fringes are of the uniform intensity.
4. The points of minimum intensity are perfectly dark.

### Diffraction

1. Diffraction is the result of interaction of light coming from different parts of the same wavefront originating from the source.
2. Diffraction fringes are not of the same width.
3. All bright fringes are not of the same intensity.
4. The points of minimum intensity are not perfectly dark.

EXAMPLE 9.3: Light of wavelength 450 nm is incident on a diffraction grating on which 5000 lines/cm have been ruled.

- (i). How many orders of spectrum can be observed on either side of the direct beam?
- (ii). Determine the angle corresponding to each other.

SOLUTION :- Given that

$$\lambda = 450 \text{ nm} = 450 \times 10^{-9} \text{ m}$$

$$d = \frac{1}{5000} \text{ cm} = \frac{1}{5000} \times 10^{-2} \text{ m}$$

or 
$$d = \frac{1}{50000} \text{ metres}$$

(i) As we have  $d \sin \theta = n\lambda$  (26)

For maximum order of spectra  $\sin \theta = 1$

Therefore  $d(1) = n\lambda$

and  $n = \frac{d}{\lambda}$

$$n = \frac{1}{500000} \text{ m} \times \frac{1}{450 \times 10^{-9} \text{ m}}$$

$$n = 4.4$$

Hence maximum order of spectrum is 4

(ii) - For first order of spectrum  $n=1$

$$d \sin \theta = n\lambda$$

$$\frac{1}{500000} \sin \theta = 1 \times 450 \times 10^{-9}$$

$$\sin \theta = (500000)(450 \times 10^{-9})$$

$$\sin \theta = 0.225$$

So  $\theta = \sin^{-1}(0.225) = \span style="border: 1px solid black; padding: 2px;">13^\circ$

For second order spectrum  $n=2$

$$d \sin \theta = n\lambda$$

$$\frac{1}{500000} \sin \theta = 2 \times 450 \times 10^{-9} \text{ m}$$

$$\sin \theta = 0.45$$

$$\theta = \sin^{-1}(0.45) = \span style="border: 1px solid black; padding: 2px;">26.7^\circ$$

For third order spectrum  $n=3$

$$\sin \theta = 3 \times 500000 \times 450 \times 10^{-9}$$

$$\sin \theta = 0.675$$

$$\theta = \span style="border: 1px solid black; padding: 2px;">42.5^\circ$$

and the fourth order spectrum  $n=4$

$$\sin \theta = 4 \times 500000 \times 450 \times 10^{-9}$$

$$= 0.9$$

$$\theta = \sin^{-1} 0.9$$

$$\theta = \span style="border: 1px solid black; padding: 2px;">62.2^\circ$$

Visit us at

<http://www.phycity.com>

## 9.12 POLARIZATION

(27)

Un Polarized Light :- Ordinary light consists of transverse wave motion in which vibration takes place in all directions in a plane perpendicular to the direction of propagation of light. Such light wave is known as unpolarized light  
e.g:- Light from incandescent bulb  
Light from sun etc.

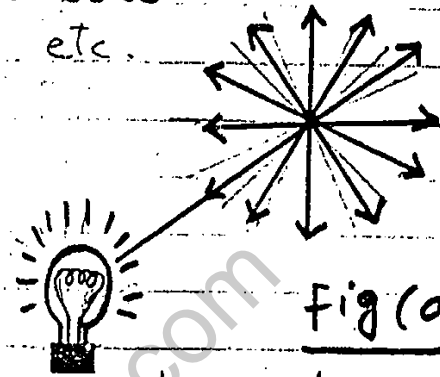


Fig (a)

### Plane Polarized Light

1- Introduction :- In transverse mechanical waves such as produced in a stretched string, the vibration of the particles of the medium are perpendicular to the direction of propagation of the waves. The vibration can be oriented along vertical, horizontal or any other direction.

In each of these cases, the transverse wave is said to be polarized.

### 2. Definition :-

The plane of polarization is the plane containing the direction of vibration of particles of the medium and direction of propagation of the wave.




Fig (b)

### 3. Explanation :-

(a) - A light wave is an electromagnetic wave produced by oscillating charge consists of a periodic variation of electric field vector accompanied by the magnetic field vector at right angle to each other. The direction

of polarization in a plane polarized light (28) wave is taken as the direction of the electric field vector.

## (b) - Production and Detection Of Plane Polarized Light.

An ordinary incandescent light emits un-polarized light, as does the sun, because its (electrical) vibrations are randomly oriented in space (fig (a)). It is possible to obtain plane polarized beam of light from un-polarized light by removing all waves from the beam except those having vibrations along one particular direction.

This can be achieved by various processes

- (i) - Selective absorption.
- (ii) - Reflection from different surfaces.
- (iii) - Scattering by small particles.
- (iv) - Refraction through crystals.
- (v) - **Selective Absorption**

The selective absorption method is the most common method to obtain plane polarized light by using certain types of materials called dichroic substances.

These materials transmit only those waves whose vibrations are parallel to a particular direction and will absorb those waves whose vibrations are in other directions.

One such commercial polarizing material is a polaroid.

### LIGHT WAVES ARE TRANSVERSE WAVES.

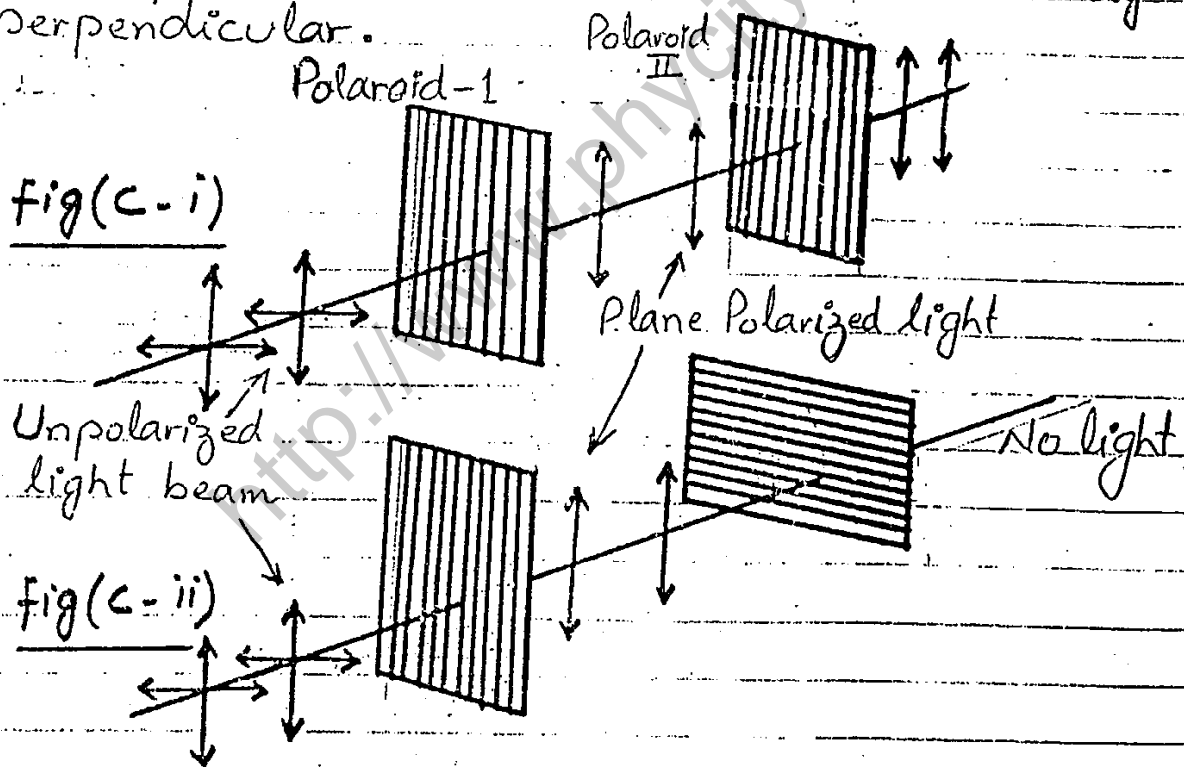
If un-polarized light is made incident on a sheet of polaroid, the transmitted light will be plane polarized. If a second sheet of polaroid is placed in such a way that the axes of the polaroid shown by straight lines drawn on them, are parallel as

shown in fig. (c-i), the light is transmitted through the second polaroid. (29)

If the second polaroid is slowly rotated about the beam of light, as axis of rotation, the light emerging out of the second polaroid gets dimmer and dimmer and disappears when the axes become mutually perpendicular as shown in fig (c-ii).

The light reappears on further rotation and becomes brightest when the axes are again parallel to each other.

This experiment proves that light waves are transverse waves. If the light waves were longitudinal, they would never disappear even if the two Polaroid were mutually perpendicular.



## (ii). Reflection From Different Surfaces

Reflection of light from water, glass, snow and rough road surfaces, for larger angles of incidences produces glare. Since the reflected light is partially polarized glare can be considerably reduced by using polaroid sunglasses.

### (iii) Scattering by small particles (30)

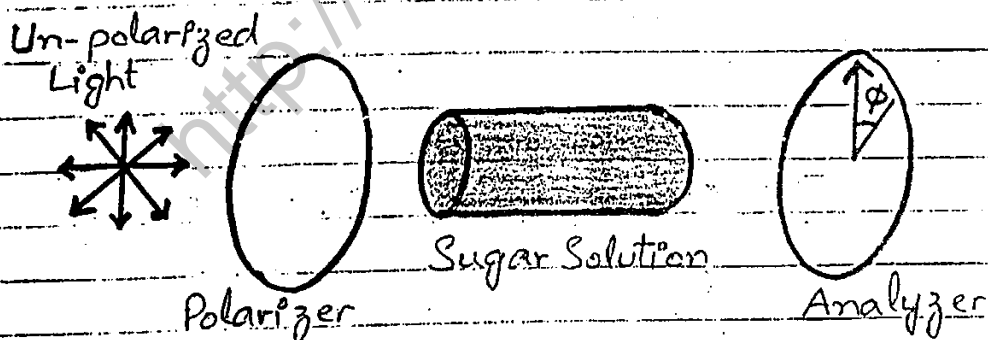
Sun light also becomes partially polarized because of scattering by air molecules of the Earth's atmosphere. This effect can be observed by looking directly up through a pair of sunglasses made of polarizing glass. At certain orientations of the lenses, less light passes through than at others.

### (iv) Refraction through Crystals

When un-polarized light refracts through crystals then specified plane polarized light is obtained according to crystalline structure.

### (C). OPTICAL ROTATION :-

Certain crystals and liquids when placed between polaroids, rotate the plane of polarization of light. Quartz and sodium chlorate crystals are typical examples, which are termed as optically active crystals.



**Figure (d).** Sugar solution rotates the plane of polarization of incident light so that it is no longer horizontal but at an angle. The analyzer thus stops the light when rotated from the vertical (crossed) positions.

A few millimeter thickness of such crystals will rotate the plane of polarization by many degrees. Certain organic substances, such as sugar and tartaric acid, show optical rotation when they are in solution.  $\rightarrow$  This property of optically active substances can be used to determine their concentration in solution.