

PROBLEMS

P.12.1 Compare magnitudes of electrical and gravitational forces exerted on an object (mass = 10.0 g, charge = 20.0 μC) by an identical object that is placed 10.0 cm from the first. ($G = 6.67 \times 10^{-11} \text{ Nm}^2 \text{ kg}^{-2}$).

SOLUTION:-

Data


$$m_1 = m_2 = 10 \text{ g} = 0.01 \text{ kg}$$

$$q_1 = q_2 = 20 \mu\text{C} = 20 \times 10^{-6} \text{ C}$$

$$r = 10 \text{ cm} = 0.1 \text{ m}$$

$$F_e = ?$$

$$F_g = ?$$



Calculation:-

$$F_e = \frac{1}{4\pi\epsilon_0} \frac{q_1 q_2}{r^2}$$

$$= \frac{9 \times 10^9 \times 20 \times 10^{-6} \times 20 \times 10^{-6}}{(0.1)^2} \text{ N}$$

$$F_e = 360 \text{ N} \quad \text{--- (1)}$$

and

$$F_g = G \frac{m_1 m_2}{r^2}$$

$$= \frac{6.67 \times 10^{-11} \times 0.1 \times 0.1}{(0.1)^2} \text{ N}$$

50

$$F_g = 6.67 \times 10^{-13} \text{ N} \quad \text{--- (2)}$$

Dividing eq (1) by (2) we get

$$\frac{F_e}{F_g} = \frac{360 \text{ N}}{6.67 \times 10^{-13} \text{ N}} = 5.4 \times 10^{14}$$

This shows that electric force between given charges is 5.4×10^{14} times greater than gravitational force.

P 12.2 Calculate the net electrostatic force on q as shown in figure.

Solution:-

Data:-

$$q_1 = 1.0 \times 10^{-6} \text{ C}$$

$$q_2 = -1.0 \times 10^{-6} \text{ C}$$

$$q = 4 \times 10^{-6} \text{ C}$$

$$r_1 = 1 \text{ m}$$

$$r_2 = 1 \text{ m}$$

$$AC = BC = 0.6 \text{ m}$$

$$AD = BD = 1 \text{ m}$$

$$CD = 0.8 \text{ m}$$

From the $\triangle CAD$

$$\tan \theta = \frac{CD}{AC} = \frac{0.8}{0.6} = \frac{4}{3}$$

$$\theta = \tan^{-1} \frac{4}{3} = 53^\circ$$

$$F_1 = \frac{1}{4\pi\epsilon_0} \frac{q_1 q}{r^2} = \frac{9 \times 10^9 \times 1 \times 10^{-6} \times 4 \times 10^{-6}}{(1)^2} \text{ N}$$

$$= 3.6 \times 10^{-2} \text{ N}$$

and

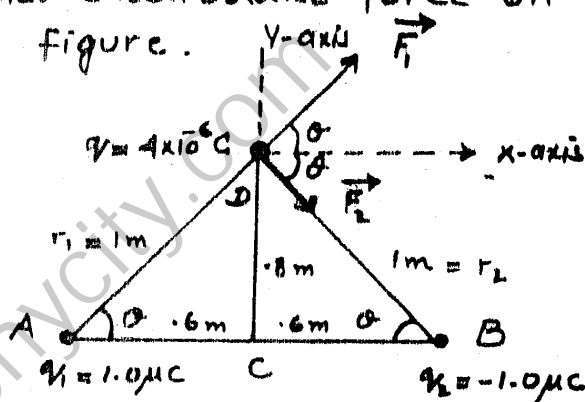
$$F_2 = \frac{1}{4\pi\epsilon_0} \frac{q_2 q}{r^2} = \frac{9 \times 10^9 \times 1 \times 10^{-6} \times 4 \times 10^{-6}}{(1)^2} \text{ N}$$

$$F_2 = 3.6 \times 10^{-2} \text{ N}$$

Resolving \vec{F}_1 and \vec{F}_2 into its components.

$$F_{1x} = F_1 \cos \theta = 3.6 \times 10^{-2} \cos 53^\circ = 0.02167 \text{ N}$$

$$F_{2x} = F_2 \cos \theta = 3.6 \times 10^{-2} \cos 53^\circ = 0.02167 \text{ N}$$



Calculations

$$F_{1y} = F_1 \sin \alpha = 3.6 \times 10^{-2} \sin 53^\circ = 0.0287 \text{ N}$$

$$F_{2y} = -F_2 \sin \alpha = -3.6 \times 10^{-2} \sin 53^\circ = -0.0287 \text{ N}$$

Let F_x and F_y be the components of the resultant force F .

$$\vec{F} = F_x \hat{i} + F_y \hat{j} \quad \text{--- (1)}$$

$$F_x = F_{1x} + F_{2x} = 0.02167 \text{ N} + 0.02167 \text{ N}$$

$$F_x = 0.04334 \text{ N}$$

and

$$F_y = F_{1y} + F_{2y} = 0.0287 - 0.0287 \text{ N}$$

$$F_y = 0$$

Putting values of F_x and F_y in eq (1)

$$\vec{F} = 0.043 \hat{i} \text{ N} + 0 \hat{j}$$

$$\boxed{\vec{F} = 0.043 \hat{i} \text{ N}}$$

12.3 A point charge $q = -8.0 \times 10^{-8} \text{ C}$ is placed at origin. Calculate electric field at point 2.0 m from the origin on z-axis.

Solution

Data:-

$$q = -8.0 \times 10^{-8} \text{ C}$$

$$r = 2.0 \text{ m}$$

$$E = ?$$

Calculations

As

$$E = \frac{1}{4\pi\epsilon_0} \frac{q}{r^2}$$

$$E = \frac{9 \times 10^9 \times 8 \times 10^{-8} \text{ N C}^{-1}}{(2)^2}$$

$$E = 1.8 \times 10^2 \text{ N C}^{-1}$$

Along z-axis

$$\vec{E} = E \hat{k}$$

$$\vec{E} = (1.8 \times 10^2 \hat{k}) \text{ N C}^{-1}$$

52

P. 12.4 Determine the electric field at the position $\vec{r} = (4\hat{i} + 3\hat{j})$ m caused by a point charge $q = 5.0 \times 10^{-6}$ C placed at origin.

Solution:-

$$\vec{r} = (4\hat{i} + 3\hat{j}) \text{ m}$$

$$q = 5.0 \times 10^{-6} \text{ C}$$

$$r = \sqrt{4^2 + 3^2} = 5 \text{ m}$$

$$\hat{r} = \frac{\vec{r}}{r} = \frac{4\hat{i} + 3\hat{j}}{5}$$

As
$$\vec{E} = \frac{1}{4\pi\epsilon_0} \frac{q}{r^2} \hat{r}$$

$$= \frac{9 \times 10^9 \times 5 \times 10^{-6}}{5^2} \times \frac{4\hat{i} + 3\hat{j}}{5}$$

$$\vec{E} = (1440\hat{i} + 1080\hat{j}) \text{ N/C}$$

P. 12.5 Two point charges $q_1 = -1.0 \times 10^{-6}$ C and $q_2 = 4.0 \times 10^{-6}$ C, are separated by a distance of 3.0 m. Find and justify the zero field location.

Solution $q_1 = -1.0 \times 10^{-6}$ C
 $q_2 = 4.0 \times 10^{-6}$ C
 AB = 3.0 m

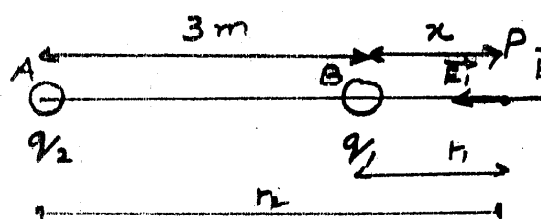
from figure

$$r_1 = (x) \text{ m}$$

$$r_2 = (3+x) \text{ m}$$

Since q_1 is a -ve charge so the field produced by it will be attractive for a test charge q_0 placed at 'P' while q_2 is a +ve charge so field will be repulsive.

Both the fields are acting in opposite directions. The resultant field will be zero if both will have same magnitudes.



$$\text{So } E_1 = E_2$$

$$\frac{1}{4\pi\epsilon_0} \frac{q_1}{r_1^2} = \frac{1}{4\pi\epsilon_0} \frac{q_2}{r_2^2}$$

$$\text{As } E = \frac{1}{4\pi\epsilon_0} \frac{q}{r^2}$$

$$\frac{1}{4\pi\epsilon_0} \times \frac{1 \times 10^{-6}}{x^2} = \frac{1}{4\pi\epsilon_0} \times \frac{4 \times 10^{-6}}{(x+3)^2}$$

$$\frac{1}{x^2} = \frac{4}{(x+3)^2}$$

$$(x+3)^2 = 4x^2$$

$$x^2 + 6x + 9 = 4x^2$$

$$\text{or } 3x^2 - 6x - 9 = 0$$

$$\text{or } x^2 - 2x - 3 = 0$$

$$x^2 - 3x + x - 3 = 0$$

$$x(x-3) + 1(x-3) = 0$$

$$(x-3)(x+1) = 0$$

$$\text{Either } x-3=0 \quad \text{or } x+1=0$$

$$x = 3 \text{ m} \quad \text{or } x = -1 \text{ m}$$

The -ve distance indicates that point 'P' is lying to the left of the point charge q_1 , as shown in fig.

In this case

electric intensity

at pt. P will be in the same directions

so resultant field will be sum of \vec{E}_1 & \vec{E}_2 but not zero.

\therefore Correct answer is $x = 3 \text{ m}$

P 12.6 Find the electric field strength required to hold suspended a particle of mass $1.0 \times 10^{-6} \text{ kg}$ and charge $1.0 \mu\text{C}$ between two plates 10.0 cm apart.

Solution


$$q_1 = 1.0 \mu\text{C} = 1.0 \times 10^{-6} \text{ C}$$

$$m = 1.0 \times 10^{-6} \text{ kg}$$

$$d = 10.0 \text{ cm} = 0.1 \text{ m}$$

J4

When a charge is placed b/w two parallel oppositely charged plates then two forces acts on it



So $F_e = W$ then charge will be suspended.

$$qE = mg$$

$$E = \frac{mg}{q} = \frac{1.0 \times 10^{-6} \text{ kg} \times 9.8 \text{ m.s}^{-2}}{1.0 \times 10^{-6} \text{ C}}$$

$$E = 9.8 \text{ N.C}^{-1} = 9.8 \text{ V.m}^{-1}$$

P-12.7 A particle having a charge of 20 electrons on it falls through a potential diff. of 100 volts. Calculate the energy acquired by it in eV.

Solution :-

$$n = 20 \text{ electrons}$$

$$e = 1.6 \times 10^{-19} \text{ C}$$

$$\text{So } q = ne = 20 \times 1.6 \times 10^{-19} \text{ C}$$

$$\Delta V = 100 \text{ volts}$$

$$\text{So } \text{K.E} = q \Delta V$$

$$= 20 \times 1.6 \times 10^{-19} \times 100$$

$$1 \text{ eV} = 1.6 \times 10^{-19} \text{ J}$$

$$\text{So } \text{K.E} = \frac{20 \times 1.6 \times 10^{-19} \times 100}{1.6 \times 10^{-19}}$$

$$\text{K.E} = 2000 \text{ eV}$$

P-12.8 :- In Millikan's experiment, oil droplets are introduced into the space b/w two flat horizontal plates 500 mm apart. The plate voltage is adjusted to exactly 780 V so that the droplet is held stationary. The plate voltage is switched off and the selected droplet is observed to fall a measured distance of 1.50 mm in 11.2 s. Given that the density of the oil used is 900 kg m^{-3} ,

and the viscosity of air at laboratory temperature is $1.80 \times 10^{-5} \text{ N m}^{-1} \text{ s}$. Calculate

- (a) - The mass and
(b) - The charge on the droplet.

Solution :-

$$d = 5 \text{ mm} = 5 \times 10^{-3} \text{ m}$$

$$V = 780 \text{ volts}$$

$$s = 1.55 \text{ mm} = 1.55 \times 10^{-3} \text{ m}$$

$$t = 11.2 \text{ s}$$

$$\eta = 1.8 \times 10^{-5} \text{ N m}^{-1} \text{ s}$$

$$\rho = 900 \text{ kg m}^{-3}$$

$$m = ?$$

$$q = ?$$

(a) - Mass $m = \frac{4}{3} \pi r^3 \rho$ ——— ①

$$V_t = \frac{s}{t} = \frac{1.55 \times 10^{-3}}{11.2} = 0.1339 \times 10^{-3} \text{ m s}^{-1}$$

As

$$r = \sqrt{\frac{9 \eta V_t}{2 \rho}}$$

$$= \frac{9 \times 1.8 \times 10^{-5} \times 0.1339 \times 10^{-3}}{2 \times 900 \times 9.8} \text{ m}$$

$$r = 0.011 \times 10^{-4} \text{ m}$$

Putting values in eq ①

$$m = \frac{4}{3} \times 3.142 \times (0.011 \times 10^{-4})^3 \times 900 \text{ kg}$$

$$m = 5.018 \times 10^{-15} \text{ kg}$$

(b) - Charge

$$q = \frac{mgd}{V}$$

$$= \frac{5.018 \times 10^{-15} \times 9.8 \times 5 \times 10^{-3}}{780} \text{ C}$$

$$q = 3.15 \times 10^{-19} \text{ C}$$

P. 12.9 A proton placed in a uniform electric field of 5000 N C^{-1} directed to right is allowed to go a distance of 10.0 cm from A to B. Calculate

(a) - Pot. diff. b/w two pts.

(b) - Work done

(c) - The change in P.E of proton

(d) - " " " K.E " "

(e) - Its velocity.

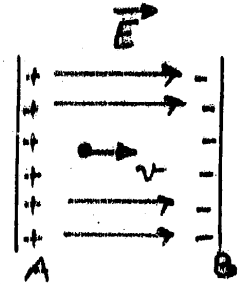
Solution :-

$$q = 1.6 \times 10^{-19} \text{ C}$$

$$m = 1.67 \times 10^{-27} \text{ kg}$$

$$E = 5000 \text{ N C}^{-1}$$

$$d = 0.1 \text{ m}$$



(a) - As

$$V = -Ed$$

$$= -5000 \text{ N C}^{-1} \times 0.1 \text{ m}$$

$$V = -500 \text{ volts.}$$

(b) -

$$\text{Work} = qV$$

$$= 1.6 \times 10^{-19} \text{ C} \times 500 \text{ Volts.}$$

$$= 500 \times 1.6 \times 10^{-19} \text{ Joules}$$

$$\text{Work} = 500 \text{ eV}$$

$$(\because 1 \text{ eV} = 1.6 \times 10^{-19} \text{ J})$$

(c) -

$$\Delta U = qV$$

$$= 1.6 \times 10^{-19} \text{ C} \times -500 \text{ Volts.}$$

$$\Delta U = -500 \text{ eV}$$

-ve sign shows that P.E is decreasing.

(d) -

$$\Delta \text{K.E} = qV$$

$$= 1.6 \times 10^{-19} \text{ C} \times 500 \text{ Volts.}$$

$$\Delta \text{K.E} = 500 \text{ eV}$$

(e) -

$$\Delta \text{K.E} = \frac{1}{2} m v^2$$

$$v = \sqrt{\frac{2 \Delta \text{K.E}}{m}} = \sqrt{\frac{2 \times 500 \times 1.6 \times 10^{-19}}{1.67 \times 10^{-27}}}$$

$$v = 3.097 \times 10^5 \text{ m s}^{-1}$$

12.10 Using zero reference point at infinity 57

determine the amount by which a point charge of $4.0 \times 10^{-8} \text{ C}$ alters the electric potential at a point 1.2 m away, when

- (a) Charge is +ve (b) Charge is -ve.

Solution :-

$$q = 4 \times 10^{-8} \text{ C}$$

$$r = 1.2 \text{ m}$$



As

$$V_1 = \frac{1}{4\pi\epsilon_0} \frac{(+q)}{r}$$

$$= \frac{9 \times 10^9 \times 4 \times 10^{-8}}{1.2} = \underline{\underline{+300 \text{ volts}}}$$

The +ve sign indicates that charge is moving against the direction of repulsive force.



$$V_2 = \frac{1}{4\pi\epsilon_0} \frac{(-q)}{r}$$

$$= \frac{9 \times 10^9 \times 4 \times 10^{-8}}{1.2} = \underline{\underline{-300 \text{ volts}}}$$

Negative

sign indicates that the charge is moving along the direction of the force of attraction.

12.11 In Bohr's atomic model of H-atom, the electron is in an orbit around the nuclear proton at a distance of $5.29 \times 10^{-11} \text{ m}$ with a speed of $2.18 \times 10^6 \text{ m/s}$. Find

- (a) The electric pot. at this distance
 (b) Total energy of the atom in eV.
 (c) The ionization energy for atom in eV.

Solution :-

$$r = 5.29 \times 10^{-11} \text{ m}$$

$$v = 2.18 \times 10^6 \text{ m/s}$$

$$e = 1.6 \times 10^{-19} \text{ C}$$

$$m = 9.1 \times 10^{-31} \text{ kg}$$

(a)

$$V = \frac{1}{4\pi\epsilon_0} \frac{q}{r} = \frac{9 \times 10^9 \times 1.6 \times 10^{-19}}{5.29 \times 10^{-11}} \text{ volts}$$

$$V = 27.22 \text{ volts}$$

(b) - The total energy of an electron in n th orbit is

$$\text{Energy} = - \frac{K e^2}{2a} = \frac{1}{2} m v^2 + q \Delta V$$

K.E. + P.E.

$\frac{1}{2} m v^2 = q \Delta V$

for this case

$$\begin{aligned} \text{Energy} &= - \frac{9 \times 10^9 \times (1.6 \times 10^{-19})^2}{2 \times 5.29 \times 10^{-11}} \\ &= - 2.1777 \times 10^{-18} \text{ J} \\ &= - \frac{2.1777 \times 10^{-18}}{1.6 \times 10^{-19}} \text{ eV} \end{aligned}$$

$$\text{Energy} = - 13.6 \text{ eV}$$

(c) - As electron possess 13.6 eV energy in the ground state of a H-atom. If we want to ionize it we must apply 13.6 eV energy from some external source or it is accelerated through a p.diff of 13.6 volts. i.e.

$$\begin{aligned} \text{Energy} &= q V \\ &= 1.6 \times 10^{-19} \times 13.6 \text{ J} \\ &= \frac{1.6 \times 10^{-19} \times 13.6}{1.6 \times 10^{-19}} \text{ eV} \end{aligned}$$

$$\text{Ionization. E.} = 13.6 \text{ eV}$$

P.12.12 :- The electric flash attachment for a camera contains a capacitor for storing the energy used to produce the flash. In one such unit the pot. diff b/w the plates of 750 μF capacitor is 330 V. Determine the energy that is used to produce the flash.

Solution :- $C = 750 \mu\text{F} = 750 \times 10^{-6} \text{ F}$

$$V = 330 \text{ V}$$

$$\text{Energy} = \frac{1}{2} C V^2$$

$$= \frac{1}{2} \times 750 \times 10^{-6} \times (330)^2$$

$$\text{Energy} = \underline{40.83 \text{ J}}$$

59

P.12.13 A capacitor has a capacitance of $2.5 \times 10^{-8} \text{ F}$. In the charging process, electrons are removed from one plate and placed on the other one. When the pot. diff. b/w the plates is 450 V , how many electrons have been transferred?

Solution :-

$$C = 2.5 \times 10^{-8} \text{ F}$$

$$V = 450 \text{ V}$$

$$e = 1.6 \times 10^{-19} \text{ C}$$

$$n = ?$$

As

$$Q = CV$$

$$= 2.5 \times 10^{-8} \text{ F} \times 450 \text{ V}$$

$$= 1125 \times 10^{-8} \text{ C}$$

$$\text{no. of } e^{-} = n = \frac{Q}{e} = \frac{1125 \times 10^{-8}}{1.6 \times 10^{-19}}$$

$$n = 703 \times 10^{11}$$

or

$$n = 7.03 \times 10^{13} \text{ electrons.}$$